

# GCSE Coasts Revision



## Instructions

- You must use your book and revision guide to answer each task.
- You will be awarded a score out of 15 for each one.
- You will record your score each week to inform your revision.
- The aim is to improve your knowledge recall and exam technique skill.
- You must use GCSE A when answering the graph/map questions.
- You must attempt to use statistics and facts when answering the 6 mark questions.
- You must develop your points using phrases such as ‘this means that’ and ‘therefore’
- Use connectives to link ideas and use key terminology.

Name:

Target Grade:













# GCSE Urban Revision



## Instructions

- You must use your book and revision guide to answer each task.
- You will be awarded a score out of 15 for each one.
- You will record your score each week to inform your revision.
- The aim is to improve your knowledge recall and exam technique skill.
- You must use GCSE A when answering the graph/map questions.
- You must attempt to use statistics and facts when answering the 6 mark questions.
- You must develop your points using phrases such as ‘this means that’ and ‘therefore’
- Use connectives to link ideas and use key terminology.

Name:

Target Grade:



Answer the three questions below. (3)

How many people live in Dharavi?

How long is the water switched on for?

What does the population have to be to be classified as a mega city?

Describe the graph using GCSE (general comment, specific example, anomaly) (3)

---

---

---

---

---

---

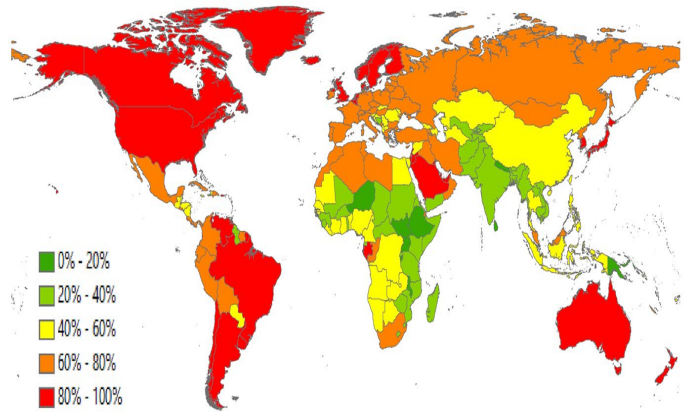
---

---

---

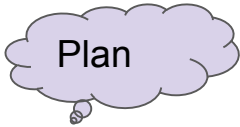
---

Map to show % urbanisation.



List two pull factors as to why people move to cities. (2)

1. \_\_\_\_\_
2. \_\_\_\_\_



Explain the challenges facing an urban area in a LIC/NEE you have studied (6 marks)

---

---

---

---

---

---

---

---

---

---

Answer the three questions below. (3)

Why is Mumbai important globally?

How much waste is recycled in Dharavi

What is a factor affecting the rate of urbanisation?

Describe the graph using GCSE (general comment, specific example, anomaly) (3)

---

---

---

---

---

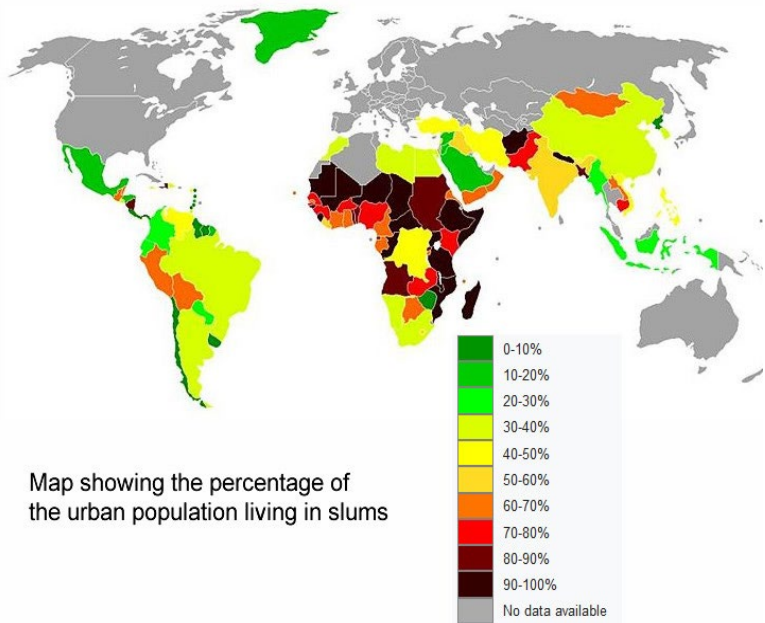
---

---

---

---

---



List two push factors as to why people move to cities. (2)

1. \_\_\_\_\_
2. \_\_\_\_\_



Explain how shanty towns can be improved using an example (6 marks)

---

---

---

---

---

---

---

---

---

---

Answer the three questions below. (3)

Why is urbanisation decreasing in HIC's?

How many children do doctors deal with a day with typhoid?

Define rural-urban.

Describe the graph using GCSE (general comment, specific example, anomaly) (3)

---

---

---

---

---

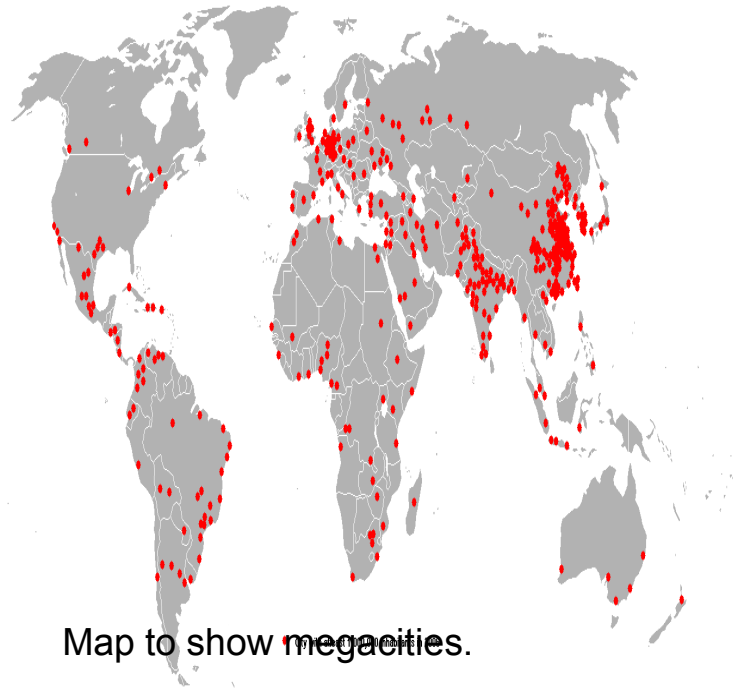
---

---

---

---

---



List two opportunities in Dharavi. (2)

1. \_\_\_\_\_
2. \_\_\_\_\_



Explain the social and economic opportunities in an urban area you have studied (6 marks)

---

---

---

---

---

---

---

---

---

---



Answer the three questions below. (3)

List one reason why Hull is important globally?

\_\_\_\_\_

Name one environmental challenge in Hull

\_\_\_\_\_

Define urbanisation

Describe the graph using GCSE (general comment, specific example, anomaly) (3)

---



---



---



---



---



---



---



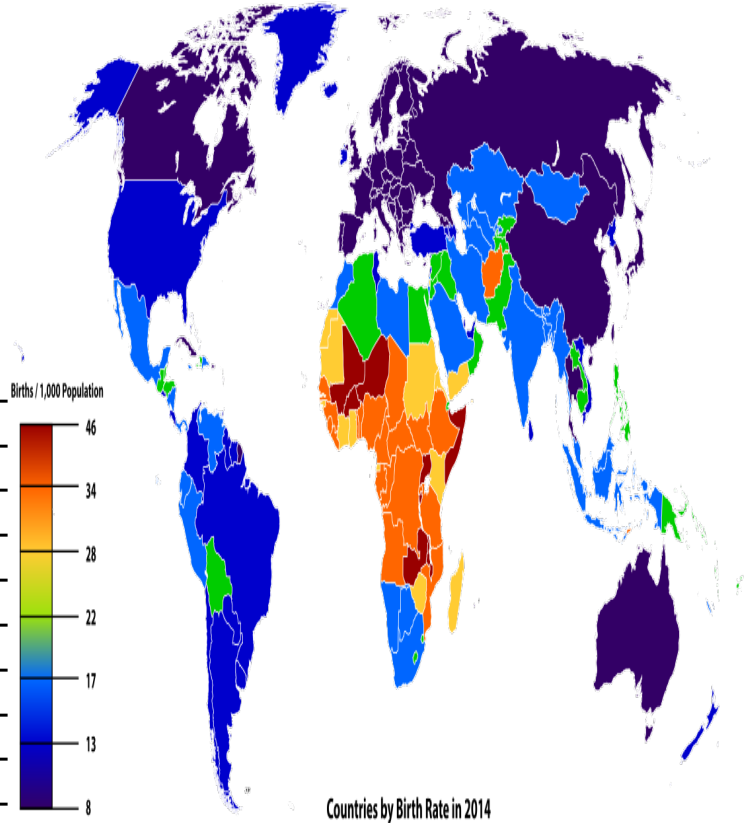
---



---



---



Map to show birth rate in the world.

List two ways Curitiba is sustainable. (2)

1. \_\_\_\_\_
2. \_\_\_\_\_



Explain using an example how cities can be sustainable (6 marks)

---



---



---



---



---



---



---



---



---



---



---

Answer the three questions below. (3)

List one economic opportunity in Hull

\_\_\_\_\_

Name one social challenge in Hull

\_\_\_\_\_

Define life expectancy

Describe the graph using GCSE (general comment, specific example, anomaly) (3)

\_\_\_\_\_

\_\_\_\_\_

\_\_\_\_\_

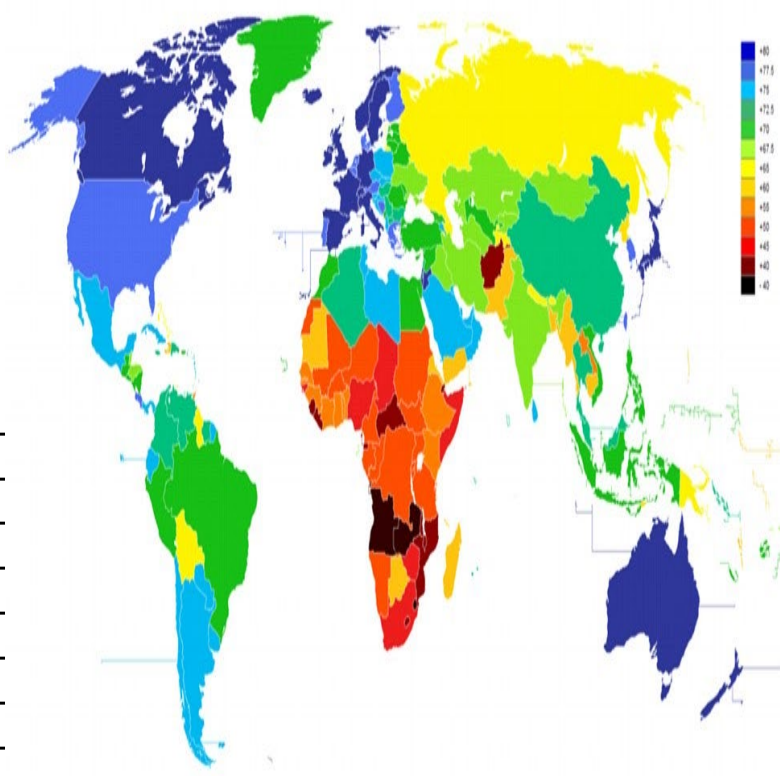
\_\_\_\_\_

\_\_\_\_\_

\_\_\_\_\_

\_\_\_\_\_

\_\_\_\_\_



Map to show life expectancy in the world.

List two impacts of the Newington and St Andrews redevelopment scheme. . (2)

1. \_\_\_\_\_

2. \_\_\_\_\_



Explain the impacts of an urban regeneration scheme you have studied (6 marks)

\_\_\_\_\_

\_\_\_\_\_

\_\_\_\_\_

\_\_\_\_\_

\_\_\_\_\_

\_\_\_\_\_

\_\_\_\_\_

\_\_\_\_\_

\_\_\_\_\_

Answer the three questions below. (3)

Suggest one reason for the slow rate of urbanisation in HIC's.

Name one economic impact of traffic congestion

State one positive impact of an urban transport scheme you have studied

Which grid square shows the rural - urban fringe? (1)

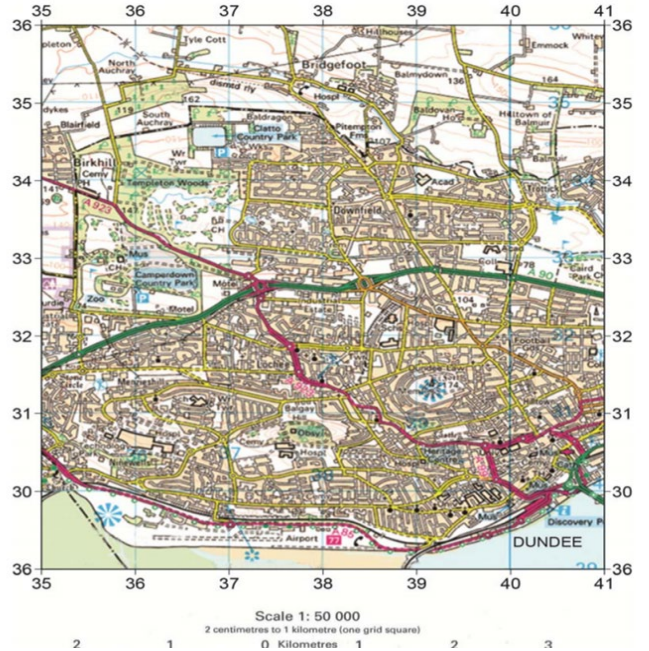
- 1. 3930
- 2. 3934
- 3. 3630
- 4. 3833

What is the 4FGR for Tyle Cott (1)

\_\_\_\_\_

What is the 6FGR for Tyle Cott (1)

\_\_\_\_\_



List two impacts of urban sprawl.. (2)

- 1. \_\_\_\_\_
- 2. \_\_\_\_\_



To what extent do LIC/NEE's provide opportunities for people (6 marks)

---

---

---

---

---

---

---

---

---

---

---

---

# GCSE Economic World Revision - Paper Two



## Instructions

- You must use your book and revision guide to answer each task.
- You will be awarded a score out of 15 for each one.
- You will record your score each week to inform your revision.
- The aim is to improve your knowledge recall and exam technique skill.
- You must use GCSE A when answering the graph/map questions.
- You must attempt to use statistics and facts when answering the 6 mark questions.
- You must develop your points using phrases such as ‘this means that’ and ‘therefore’
- Use connectives to link ideas and use key terminology.

Name:

Target Grade:





Answer the three questions below. (3)

Name one country in stage 2 of the DTM model.

Name one country in stage 5 of the DTM model

State one issue with the DTM model.

Describe the distribution of GDP around the world (3) (Use GCSE A)

---

---

---

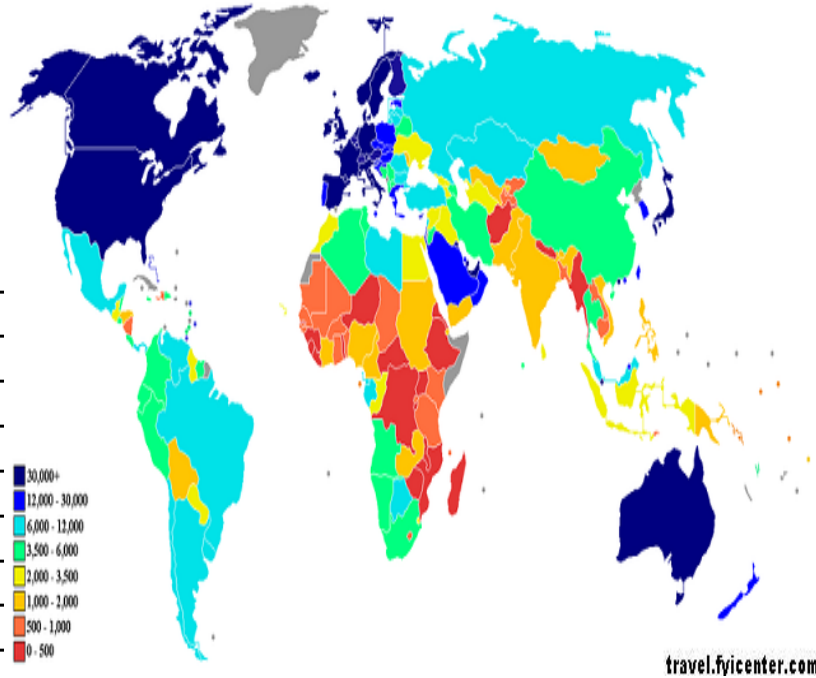
---

---

---

---

---



List two factors affecting development (2)

1. \_\_\_\_\_
2. \_\_\_\_\_



Explain the physical factors affecting development (6)

---

---

---

---

---

---

---

---

---

---

Answer the three questions below. (3)

Name one historical factor affecting development

Define infant mortality,

Define birth rate.

Describe the distribution of malaria around the world (3) (Use GCSE A)

---

---

---

---

---

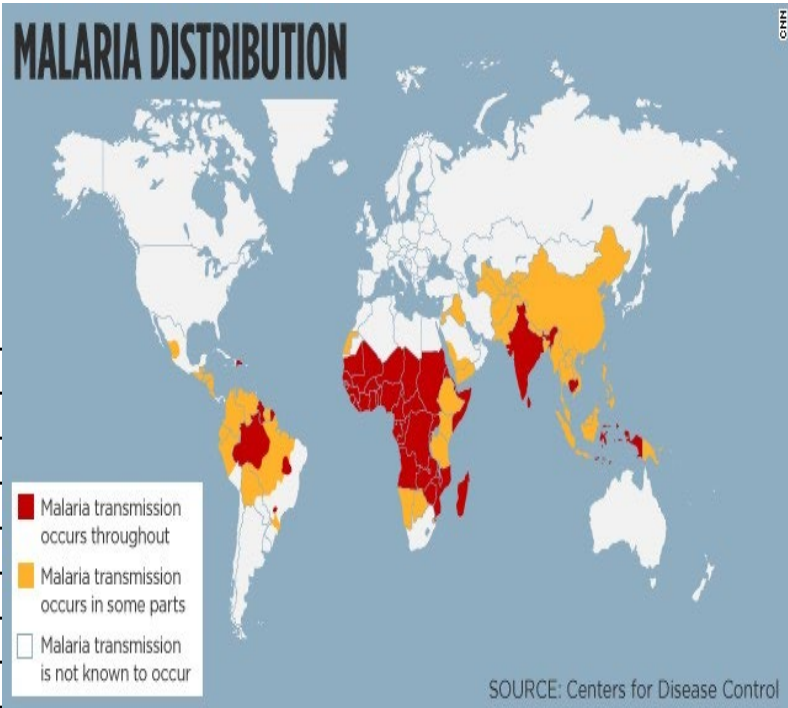
---

---

---

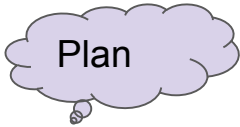
---

---



List two reasons why there are global disparities in wealth (2)

1. \_\_\_\_\_
2. \_\_\_\_\_



Explain why global disparities in health exist around the world (6)

---

---

---

---

---

---

---

---

---

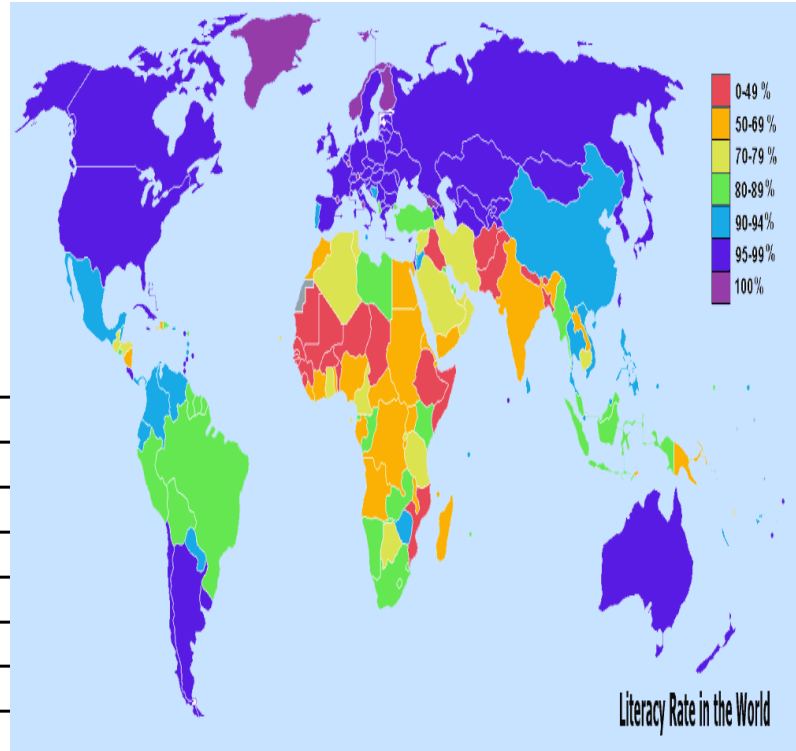
---

Answer the three questions below. (3)

Name one social factor affecting development

Define literacy rate.,

What is the birth and death rate like in stage 1 on the DTM



Describe the distribution the worlds literacy rate (3) (Use GCSE A)

---

---

---

---

---

---

---

---

---

---

List ways Kenya has attempted to increase tourism (2)

1. \_\_\_\_\_
2. \_\_\_\_\_



Explain how tourism can help reduce the development gap (6)

---

---

---

---

---

---

---

---

---

---

Answer the three questions below. (3)

What is the population of India

What % of India's industry is primary (2010),

How much did Kenya reduce visa prices by in 2009?

Compare the percentage of the price received by the Fairtrade banana producer with that of a non-Fairtrade banana producer. (2)

---



---



---



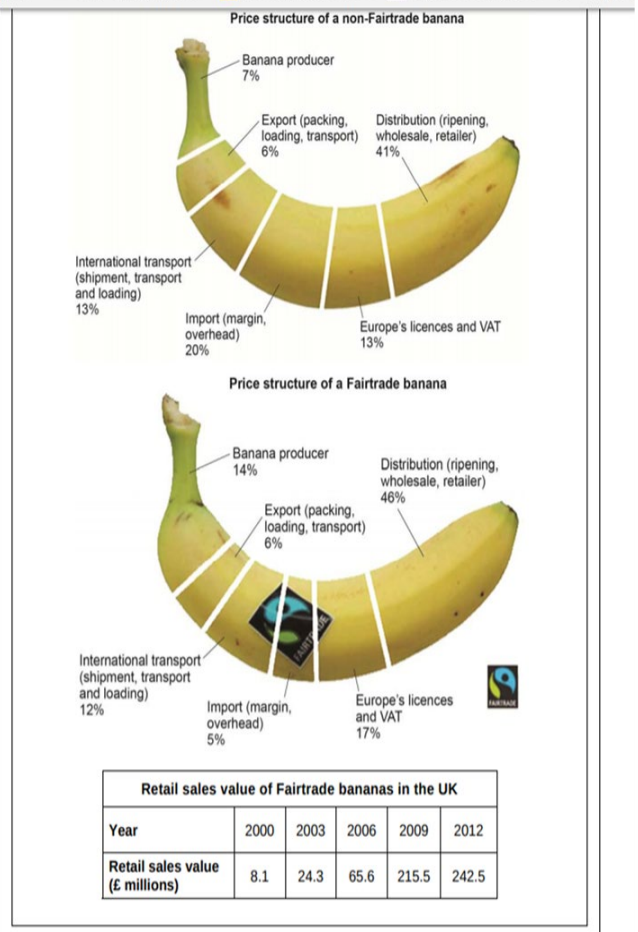
---



---

Calculate the increase in millions fairtrade bannans have made in the UK from 2000 - 2012 (1)

---



Describe how India's industrial structure has changed (Think - Primary, Secondary, Tertiary) (2)

---



---



---

Evaluate whether or not TNC have had a positive impact on the host country (6)

---



---



---



---



---



---



---



---



---



---



# GCSE Rivers Revision



## Instructions

- You must use your book and revision guide to answer each task.
- You will be awarded a score out of 15 for each one.
- You will record your score each week to inform your revision.
- The aim is to improve your knowledge recall and exam technique skill.
- You must use GCSE A when answering the graph/map questions.
- You must attempt to use statistics and facts when answering the 6 mark questions.
- You must develop your points using phrases such as ‘this means that’ and ‘therefore’
- Use connectives to link ideas and use key terminology.

Name:

Target Grade:















# GCSE Resource Management Revision



## Instructions

- You must use your book and revision guide to answer each task.
- You will be awarded a score out of 15 for each one.
- You will record your score each week to inform your revision.
- The aim is to improve your knowledge recall and exam technique skill.
- You must use GCSE A when answering the graph/map questions.
- You must attempt to use statistics and facts when answering the 6 mark questions.
- You must develop your points using phrases such as ‘this means that’ and ‘therefore’
- Use connectives to link ideas and use key terminology.

Name:

Target Grade:

Answer the three questions below. (3)

What are food miles?

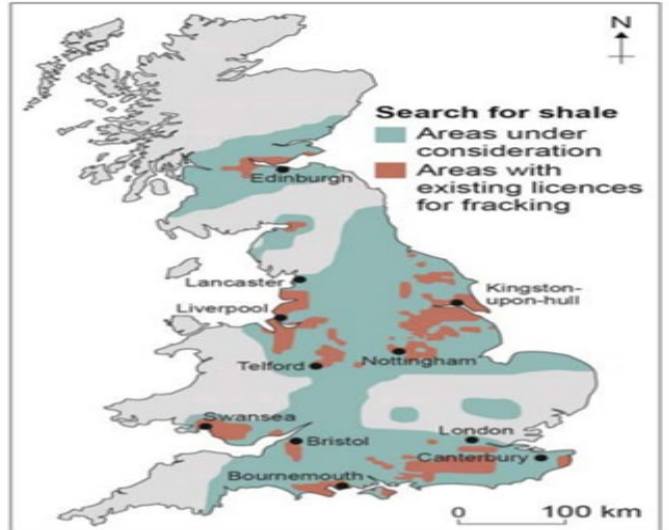
How can we reduce food miles

Name our example of how to increase water security in a LIC/NEE

Describe the distribution of cities with existing fracking licences (3)

\_\_\_\_\_
\_\_\_\_\_
\_\_\_\_\_
\_\_\_\_\_
\_\_\_\_\_
\_\_\_\_\_
\_\_\_\_\_

Figure 9



List two sources of renewable energy.

- 1. \_\_\_\_\_
2. \_\_\_\_\_



Explain how importing food impacts on the environment (6 marks)

\_\_\_\_\_
\_\_\_\_\_
\_\_\_\_\_
\_\_\_\_\_
\_\_\_\_\_
\_\_\_\_\_
\_\_\_\_\_
\_\_\_\_\_
\_\_\_\_\_
\_\_\_\_\_
\_\_\_\_\_

Answer the three questions below. (3)

What is agribusiness?

Name one large scale water transfer scheme

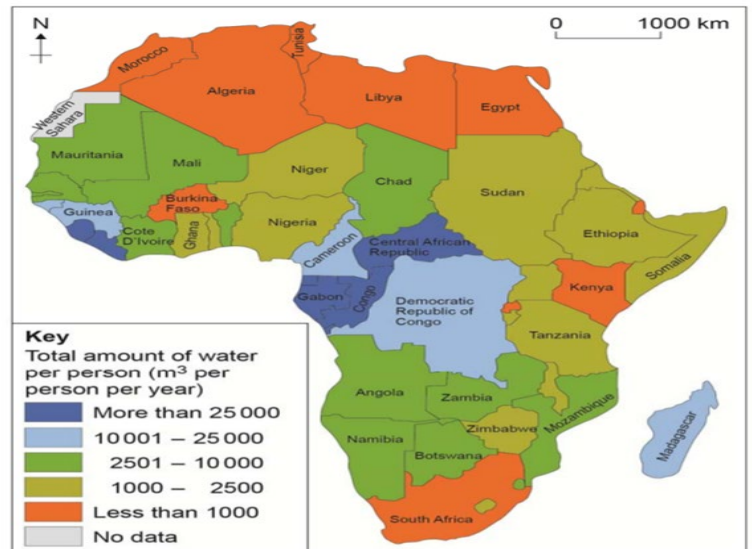
State one way water can be managed in the UK

What is the total amount of water for:

- (A) Chad \_\_\_\_\_
- (B) Egypt \_\_\_\_\_
- (C) Somalia \_\_\_\_\_

Which region N/E/S/W has the lowest Total of water? \_\_\_\_\_

Figure 14



List two ways rainwater harvesting is good way of increasing water supply in LIC/NEE's(2)



Explain how an LIC/NEE can increase its water supply. (6 marks)

\_\_\_\_\_

\_\_\_\_\_

\_\_\_\_\_

\_\_\_\_\_

\_\_\_\_\_

\_\_\_\_\_

\_\_\_\_\_

\_\_\_\_\_

\_\_\_\_\_









Answer the three questions below. (3)

What is desalination?

What is grey water?

Why is buying local food better than importing?

Describe the distribution of hydroelectric power around Africa(3)

---

---

---

---

---

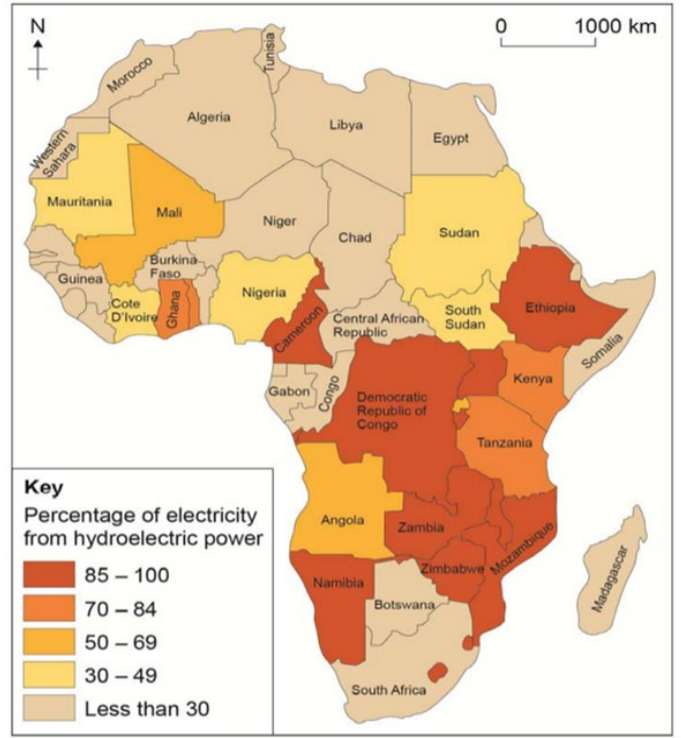
---

---

---

---

---



What % of electricity does the following countries get from HEP?

1. Chad: \_\_\_\_\_
2. South Africa: \_\_\_\_\_



Explain how water supplies can be managed more sustainably .(6 marks)

---

---

---

---

---

---

---

---

---

---